



purple	white	pink	red


1
2
3
4
5
6
7
8
9
10
11



Graphing Valentine's M & M's



Name _____



7. Which color is your favorite?

6. What color M&M did you have the *least* of?

5. What color M&M did you have the *most* of?

4. How many purple M&M's did you have?

3. How many white M&M's did you have?

2. How many pink M&M's did you have?

1. How many red M&M's did you have?

Name

